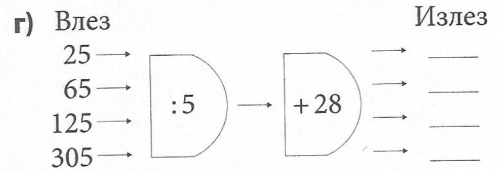
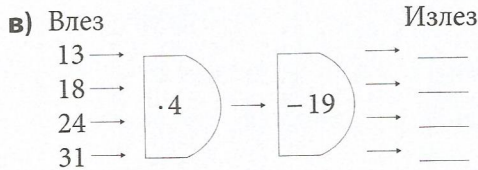
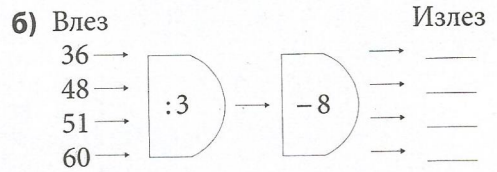
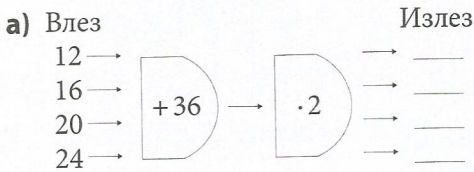
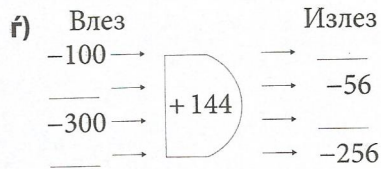
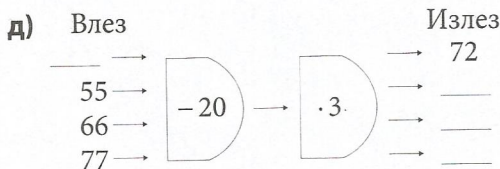
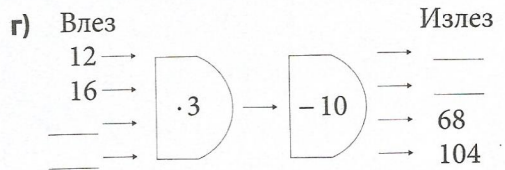
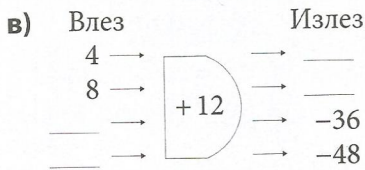
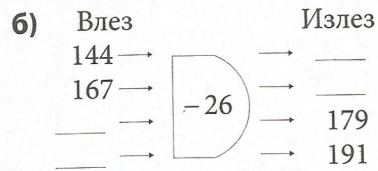
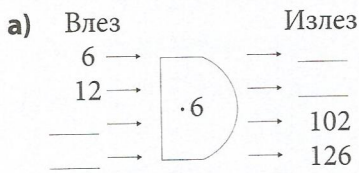


7.4 Изведување и употреба на формули

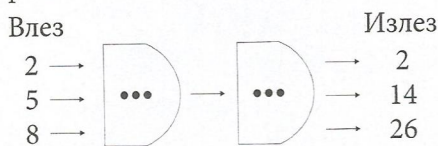
1. Пополни ги следните функционални машини според даденото правило.



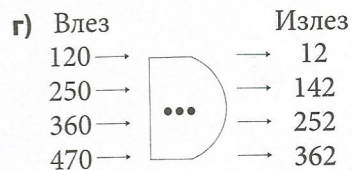
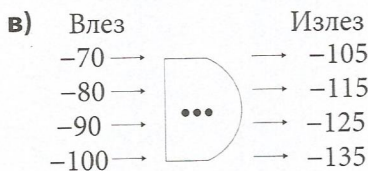
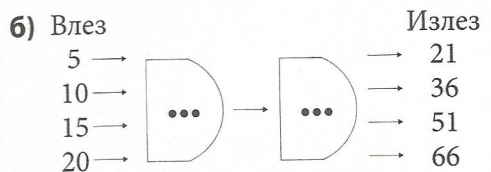
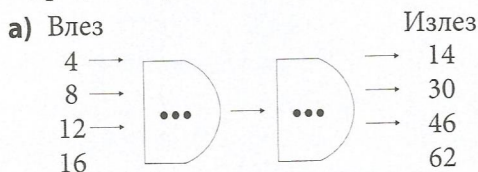
2. Пополни ги празните места во дадените функционални машини.



3. Јана и Кирил го одредиле правилото $y = 3x - 4$ за следната функционална машина. Дали ти решиле?



4*. Одреди ги правилата на дадените функционални машини:



Во задачите од 5 до 15, замени ги соодветните вредности и пресметај ја вредноста на дадениот израз.

5. а) $a + 117 - b = ?$, ако $a = 2107$ и $b = 864$

б) $5201 - a - b - c = ?$, ако $a = 326$, $b = 284$ и $c = 1687$